

ENGLISH

1. Collect some catchy NOUNS from everyday newspaper or magazine on the following category - (PERSONALITIES, PLACES, ANIMALS ,THINGS)and take their cut outs.Make a tabular chart, paste them and note down their names in your notebook.
2. Imagine that you have a pet in your home.Now write in ten sentences how will you take care of your pet in this scorching summer?
3. Some children had gone for a picnic on a beach.After eating their food ,they threw the wrapper on the beach and in the sea.Were they right in doing so? Why? What would you do to restore the natural beauty and cleanliness of the beach?
4. What would you do if you find some children teasing the animals in the zoo?
5. DOGS are our great friends.They are intelligent and faithful and they have strong power of smell. So,they have been doing various kinds of useful work for us.
Paste or draw at least 5 different breeds of dogs and write how each breed serve us.[Usefulness of Dogs].

HINDI

1. प्रस्तुत गद्यांश को पढ़कर पूछे गए प्रश्नों का उत्तर लिखिए:-

भारत की संस्कृति बहुत पुरानी है। प्राचीन काल में इसे सोने की चिड़िया कहा जाता था। दूर-दूर के देशों के लोग यहाँ व्यापार करने आते थे। इसके उत्तर में हिमालय पर्वत है, जो दुनिया का सबसे ऊँचा पर्वत है। हिमाचल से अनेक पवित्र नदियाँ निकलती हैं, जो देश को हरा-भरा रखती हैं। इसके दक्षिण में हिंद महासागर है।

क) भारत के उत्तर और दक्षिण में क्या है?

ख) भारत को प्राचीन काल में क्या कहा जाता था?

ग) प्रस्तुत गद्यांश से एक संयुक्त व्यंजन वाला शब्द छाँटकर लिखिए।

2. निम्नलिखित शब्दों के उचित संबंध वाले विकल्प छाँटकर लिखिए-

क) डाली : डालियाँ :: टोकरी : ?

i) टोकरीया ii) टोकरियाँ iii) टोकरीयाँ iv) टोकरियां

ख) क्क : मक्का :: स्स : ?

i) पुस्तक ii) पक्का iii) पत्ता iv) गुस्सा

3. अपने कॉपी में एक पेड का चित्र बनाकर उसमें कोई पाँच संयुक्त व्यंजन वाले शब्द लिखिए।

4. नीचे दिए गए चित्र का वर्णन अपने शब्दों में कीजिए-

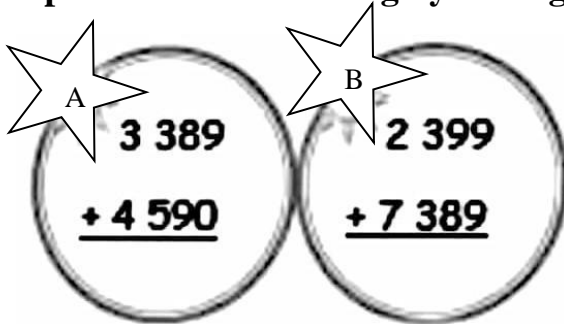


BENGALI

- ৱড় জল আরম্ভ হলে সবাই নাচঘরে এসে উপস্থিত হয়েছিল কেন?
- ‘শহরের রাস্তায় হয়েছে এক কোমর জল।’- কোন গল্পের অংশ? লেখক কে? কে এসে খবর দেয়?
- প্রভাত হলে ছেলের দল ও কুমারীরা কী করে তা কবিতা অনুসারে বর্ণনা কর।
- ‘ষাদুধন’ কাদের বলা হয়েছে? তারা কখন কী ভাবে আনন্দে থাকবে?
- নিচের বাক্যগুলি থেকে উদ্দেশ্য ও বিধেয় পৃথক করে লেখ:
ক) অমল গরমের ছুটিতে দীঘা যাবে।
খ) পড়তে বসো।
গ) পুজোর সময় পাড়ার মেয়েরা শাঁখ বাজায়।
- নিচের বাক্যগুলি সাজিয়ে পুনরায় লেখো।
ক) খায় ঘাস মাঠের গোরু।
খ) লিখেছেন রবীন্দ্রনাথ ঠাকুর গীতাঞ্জলি বিশ্বকবি।
গ) ছিল ঘাস ভিতরে চমৎকার বনের।


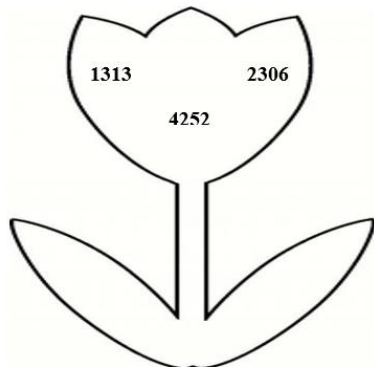
MATHS

- Priya is confused to select the rings. She has to select the ring whose result is below 9000. Help her to select the ring by adding the numbers.



Priya selects ring

2. Here is a tulip with different numbers. Arrange the numbers in column and add.




2. Look at the picture and answer.



- A) Arrange the numbers in ascending order. _____.
- B) Balloon having greatest number is _____.
- C) The predecessor of balloon with smallest number is _____.
- D) Write the number name of the balloon which has digit three in its tens place.
_____.
- E) Find the difference between the balloons having greatest and least number _____.

4. Find the missing number?



5. Solve the riddles:-

(A)

- I am a 4-digit number.
- My thousands digit is more than 6.
- My hundreds digit is an odd number.
- My tens digit is not less than 6.
- Who am I?

7261	8073	3925
973	6372	5307
9314	7963	977

(B) I am an odd number, take away an alphabet and I become even.

Who am I?

EIGHT	ELEVEN	SEVEN	SEVENTEEN
-------	--------	-------	-----------

6. In which year you were born? Write the year in expanded form.

7. Fill in the blanks

(A) $75 + \underline{\hspace{2cm}} = 10 \text{ tens}$

(B) $86 - \underline{\hspace{2cm}} = 86$

(C) Successor of greatest 3-digit number is the predecessor of .

8. In the given number 7602, the digits at ones place and thousands place are interchanged, find the difference of the number formed by interchanging the digits and the given number.

SCIENCE

For Q. No. 1 to 3, choose the correct option from the choices given against each question:

- _____ helps to protect the parts of our body present below it.
a) Ear b) Skin c) Nose d) Tongue
- One should practice _____ to stay calm and quiet.
a) Yoga b) Exercise c) Meditation d) None of these
- The part of a plant which blooms into a flower and then grows into a fruit is _____.
a) Seed b) Bud c) Leaf d) Stem
- Solve the riddle.
a) I sometimes run but I cannot walk. You always follow me around. Who am I?
- Unscramble the word using the hint given in the bracket:
NGERFI ADYL _____ (a herb).

6. **Rewrite the following statement correctly:**

Cotton plant lives for a few hours only.

7. **Categorise the following plants according to the table given below:**

(Pea plant, Grass, Mint, Rose, Tomato, Mehendi, Pumpkin, Money plant)

SHRUBS	CREEPERS	HERBS	CLIMBERS

8. **Observe the picture given below and identify the sense organs:**

A. _____

B. _____

C. _____

D. _____



9. On a fine evening Ayush went to a nearby park with his mother. He saw many colorful birds, squirrels and rabbits in the park. Ayush also played football with some other children of his age group there. Ayush enjoyed the evening a lot and thanked his mother for taking him to the park.
- List a few sounds which Ayush might have heard in the park.
 - Which sense organ did help Ayush to hear all those sounds?
 - Complete the following table from the list of the sounds Ayush heard.

Pleasant sounds	Unpleasant Sounds

10. **Draw a plant and label its following parts:**

- Store house of seeds.
- The site of chlorophyll.
- Absorbs water and mineral for the plant.
- Grows into a fruit.
- Supports a plant and keep it upright.

SOCIAL SCIENCE

A. Fill in the blanks:-

- i. We must eat _____ diet to remain healthy. (balanced/unhealthy)
- ii _____ is the staple diet of South India.(rice/wheat)
- iii In a _____ many members live together.(joint/nuclear)
- iv. Twins that doesn't look exactly alike are known as _____.
(identical/non-identical)
- v. Prakash Padukone was an international level badminton player but his daughter Deepika Padukone is _____.(a painter/an actress)
- vi. Our mother's parents are our _____ grandparents.
(maternal/paternal)

B. Answer the following questions :-

- i. 'Family that eats together, stays together'.

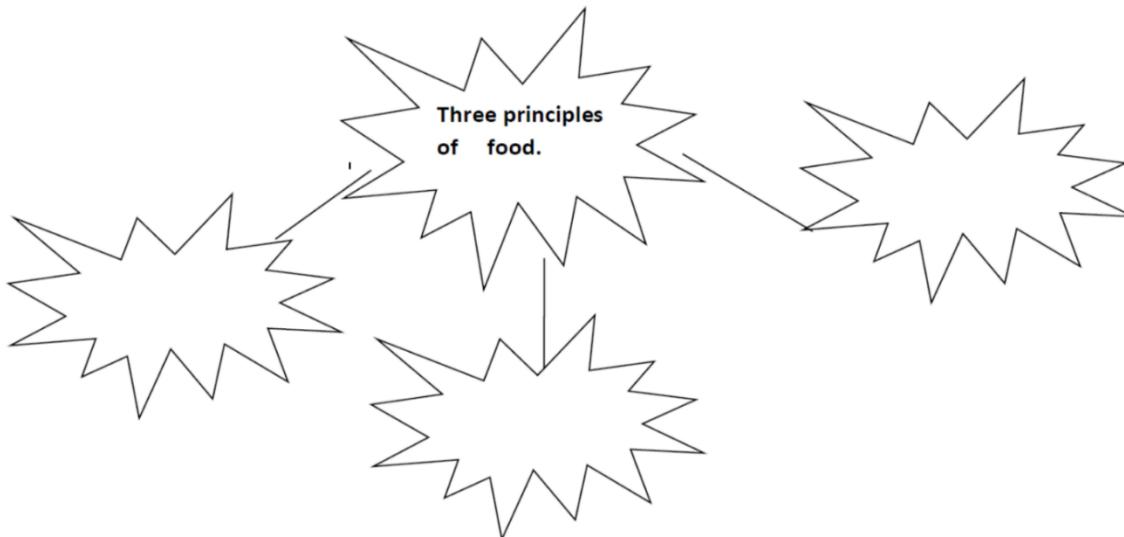
State any two things which you do together with your family members .

- ii. Complete the table:

Places	Food Items
People living in the desert	
People living close to sea coast	

- iii. According to your view why more and more people are giving up non vegetarian food ?

- iv. Draw a web chart showing three principles of food.



C. Mark and colour following the states in a political map of India .

- i. A state where we can taste rasogullas.
- ii. A state where Vishu's mother completed her schooling.
- iii. A state where Gostaba is famous.
- iv. Capital of India.
- v. A state where Sunita William's relatives stay.

NOTE : HOLIDAY HOMEWORK FOR ALL SUBJECT TO BE DONE IN YOUR SUBJECT NOTEBOOKS PROVIDED BY THE SCHOOL.